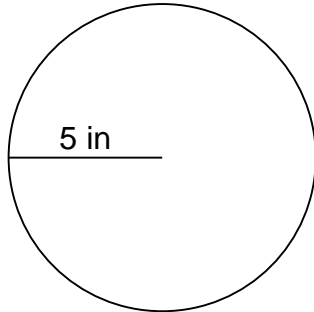


Name: _____

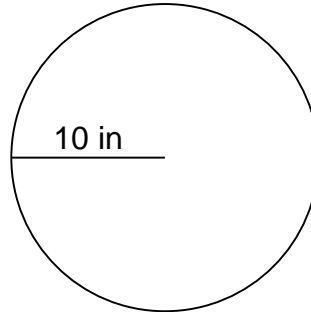
Circumference Challenge (in)

You are given the radius of each circle. Calculate the circumference and the area.

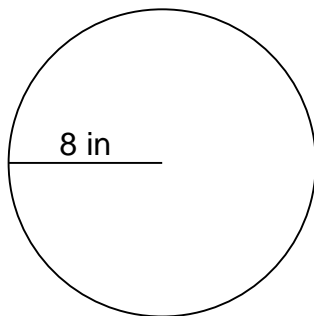
1.



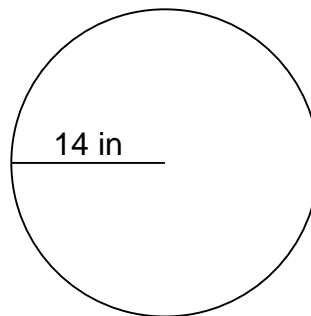
2.



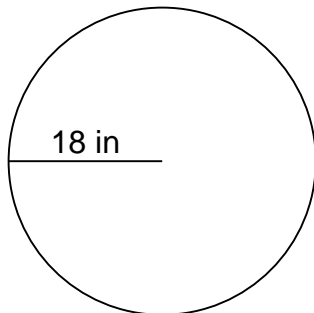
3.



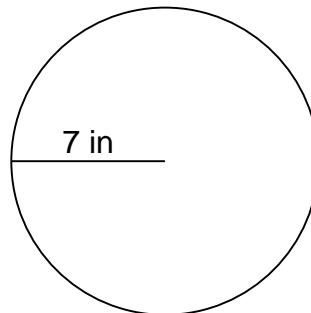
4.




5.



6.



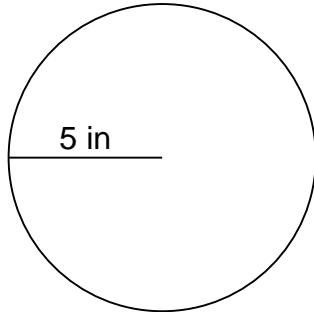


Name: _____

Circumference Challenge (in)

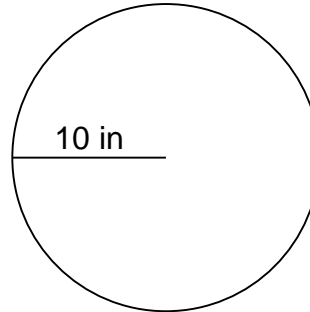
You are given the radius of each circle. Calculate the circumference and the area.

1.



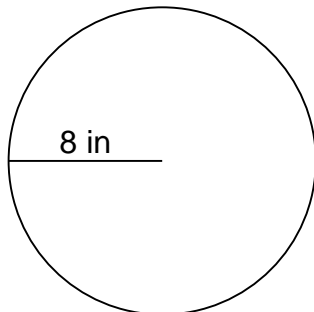
$$C=31.40 \text{ in}$$
$$A=78.50 \text{ in}^2$$

2.



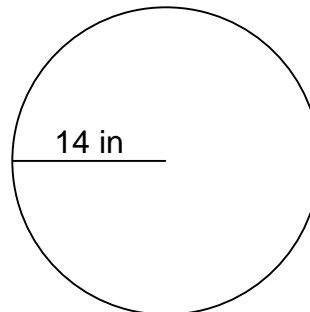
$$C=62.80 \text{ in}$$
$$A=314.00 \text{ in}^2$$

3.



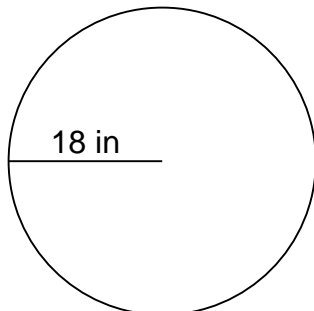
$$C=50.24 \text{ in}$$
$$A=200.96 \text{ in}^2$$

4.



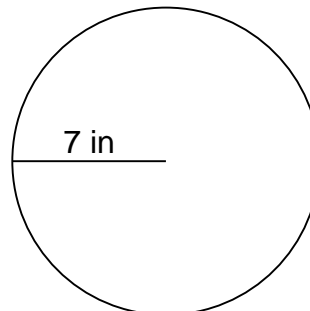
$$C=87.92 \text{ in}$$
$$A=615.44 \text{ in}^2$$

5.



$$C=113.04 \text{ in}$$
$$A=1,017.36 \text{ in}^2$$

6.



$$C=43.96 \text{ in}$$
$$A=153.86 \text{ in}^2$$