

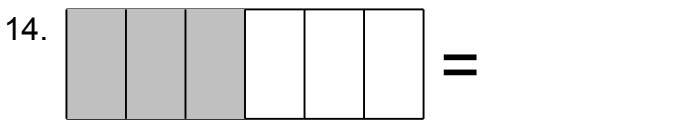
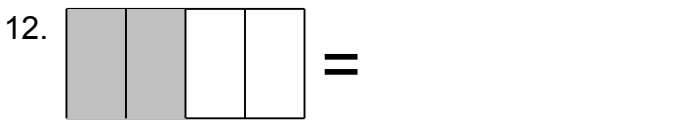
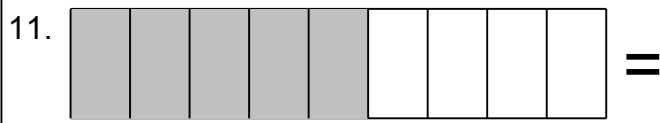
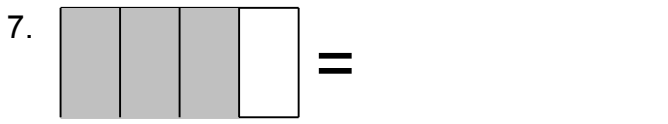
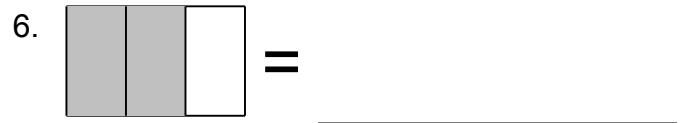
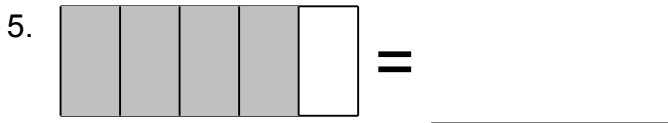
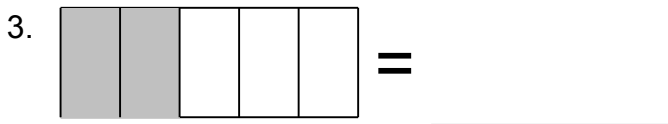
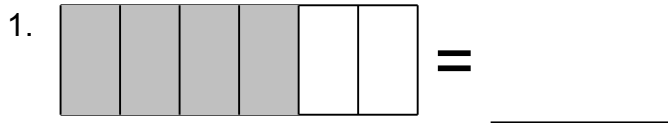


Name: \_\_\_\_\_

# Fraction Challenge

Look at the Shaded Portion and Identify the Fraction

Shade the fraction.






Name: \_\_\_\_\_


# Fraction Challenge


Look at the Shaded Portion and Identify the Fraction


Shade the fraction.


1.  =  $\frac{2}{3}$  \_\_\_\_\_


2.  =  $\frac{5}{6}$  \_\_\_\_\_


3.  =  $\frac{2}{5}$  \_\_\_\_\_


4.  =  $\frac{1}{3}$  \_\_\_\_\_


5.  =  $\frac{4}{5}$  \_\_\_\_\_

6.  =  $\frac{2}{3}$  \_\_\_\_\_


7.  =  $\frac{3}{4}$  \_\_\_\_\_


8.  =  $\frac{1}{4}$  \_\_\_\_\_


9.  =  $\frac{7}{8}$  \_\_\_\_\_

10.  =  $\frac{2}{9}$  \_\_\_\_\_

11.  =  $\frac{5}{9}$  \_\_\_\_\_

12.  =  $\frac{1}{2}$  \_\_\_\_\_

13.  =  $\frac{3}{4}$  \_\_\_\_\_

14.  =  $\frac{1}{2}$  \_\_\_\_\_