

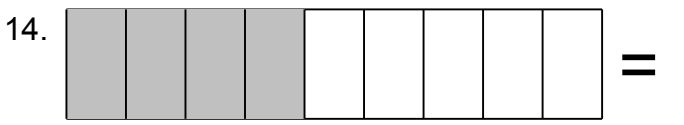
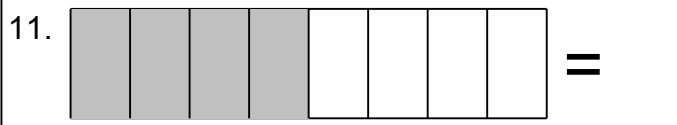
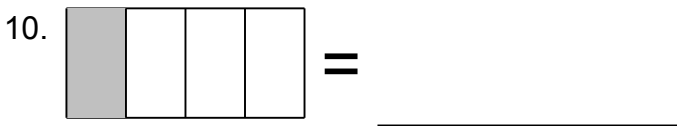
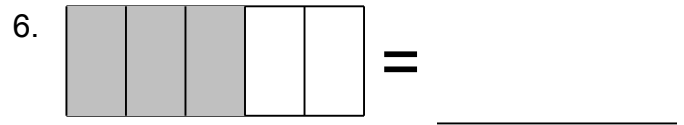
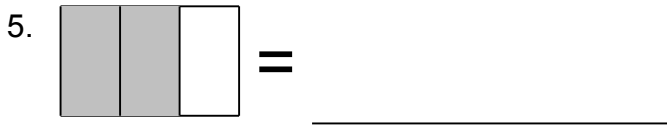
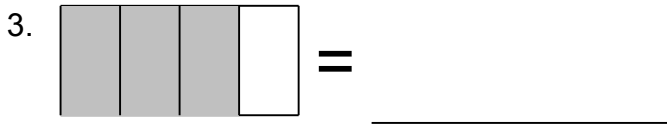
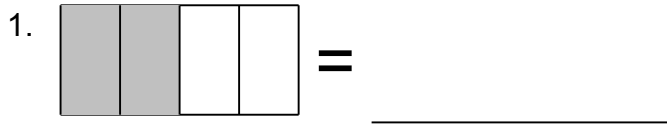


Name: _____

Fraction Challenge

Look at the Shaded Portion and Identify the Fraction

Shade the fraction.






Name: _____


Fraction Challenge

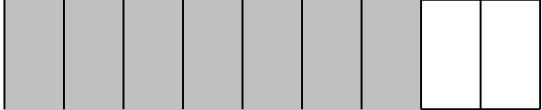
Look at the Shaded Portion and Identify the Fraction


Shade the fraction.


1.  = $\frac{1}{2}$ _____

2.  = $\frac{1}{4}$ _____

3.  = $\frac{3}{4}$ _____


4.  = $\frac{7}{9}$ _____


5.  = $\frac{2}{3}$ _____


6.  = $\frac{3}{5}$ _____

7.  = $\frac{5}{8}$ _____


8.  = $\frac{1}{3}$ _____


9.  = $\frac{1}{8}$ _____

10.  = $\frac{1}{4}$ _____

11.  = $\frac{1}{2}$ _____

12.  = $\frac{5}{9}$ _____

13.  = $\frac{1}{3}$ _____

14.  = $\frac{4}{9}$ _____