

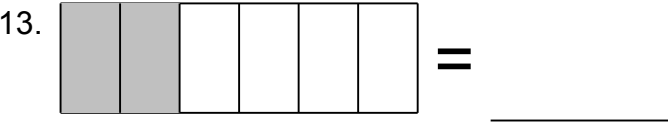
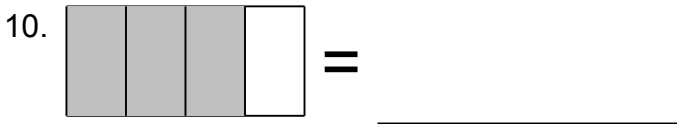
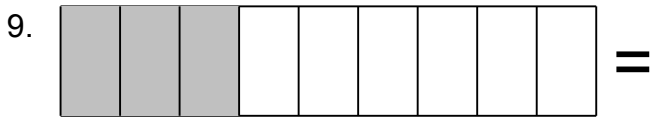
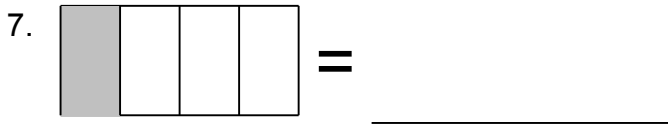
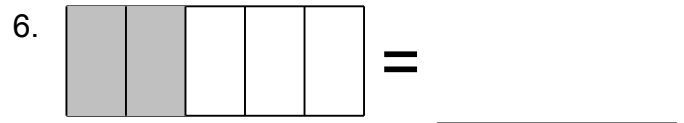
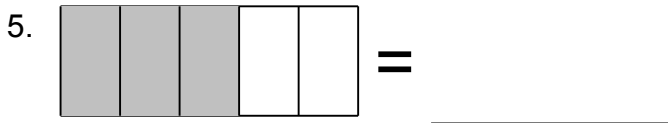
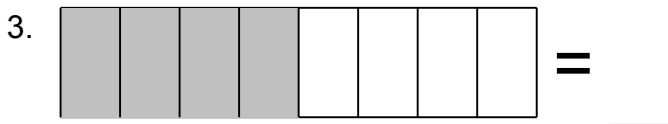
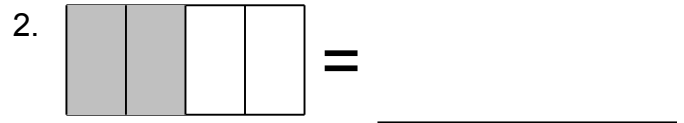
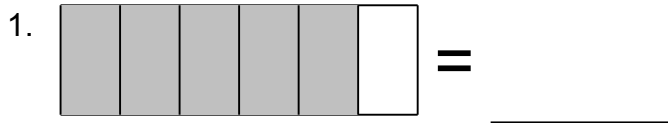


Name: \_\_\_\_\_

# Fraction Challenge

Look at the Shaded Portion and Identify the Fraction

Shade the fraction.






Name: \_\_\_\_\_

# Fraction Challenge


Look at the Shaded Portion and Identify the Fraction


Shade the fraction.


1.  =  $\frac{5}{6}$


2.  =  $\frac{1}{2}$

3.  =  $\frac{1}{2}$


4.  =  $\frac{1}{3}$


5.  =  $\frac{3}{5}$

6.  =  $\frac{2}{5}$


7.  =  $\frac{1}{4}$

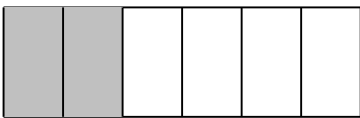
8.  =  $\frac{3}{8}$

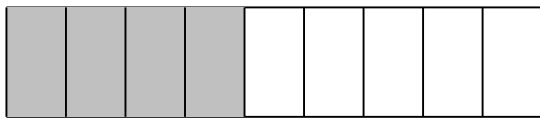
9.  =  $\frac{1}{3}$

10.  =  $\frac{3}{4}$

11.  =  $\frac{7}{9}$

12.  =  $\frac{7}{8}$

13.  =  $\frac{1}{3}$

14.  =  $\frac{4}{9}$